

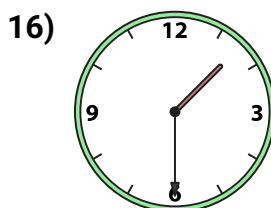
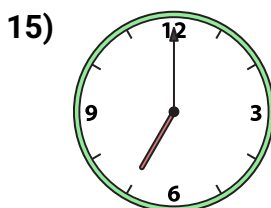
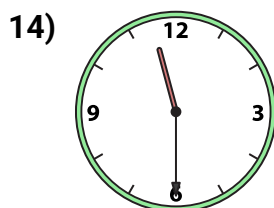
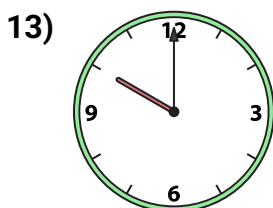

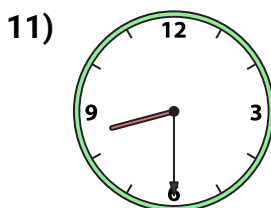
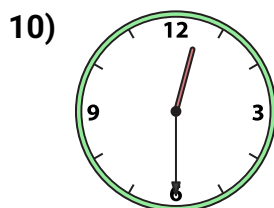
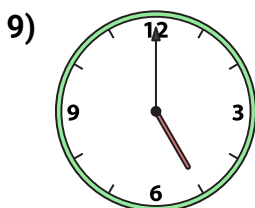
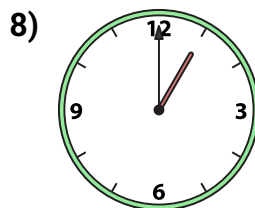
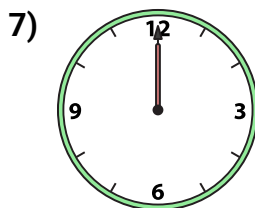
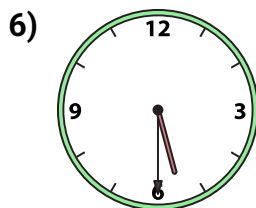
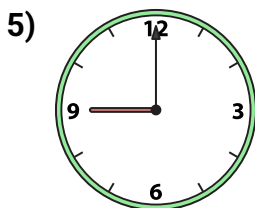
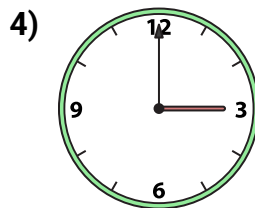
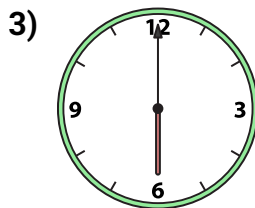
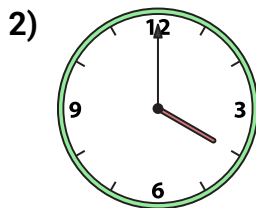
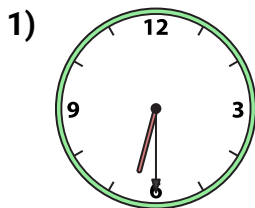


# Emparejando Relojes

Nombre: \_\_\_\_\_

Emparejar el reloj analógico con el reloj digital correspondiente.

Respuestas



A. 4:00

B. 5:30

C. 3:00

D. 12:00

E. 6:00

F. 6:30

G. 2:00

H. 11:30

I. 5:00

J. 10:00

K. 1:00

L. 7:00

M. 1:30

N. 8:30

O. 9:00

P. 12:30

1. \_\_\_\_\_

2. \_\_\_\_\_

3. \_\_\_\_\_

4. \_\_\_\_\_

5. \_\_\_\_\_

6. \_\_\_\_\_

7. \_\_\_\_\_

8. \_\_\_\_\_

9. \_\_\_\_\_

10. \_\_\_\_\_

11. \_\_\_\_\_

12. \_\_\_\_\_

13. \_\_\_\_\_

14. \_\_\_\_\_

15. \_\_\_\_\_

16. \_\_\_\_\_

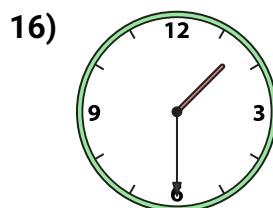
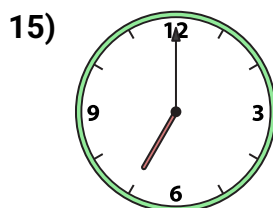
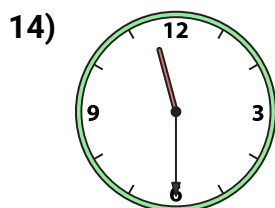
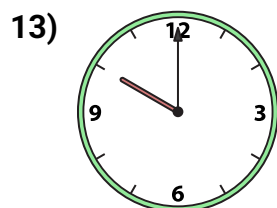

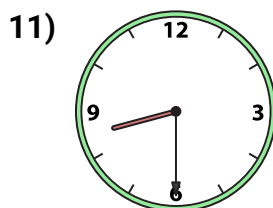
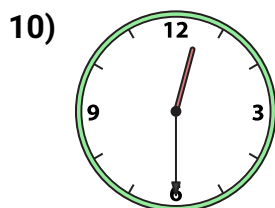
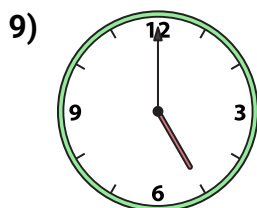
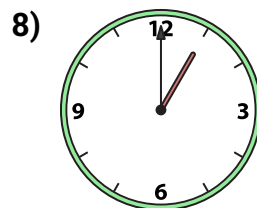
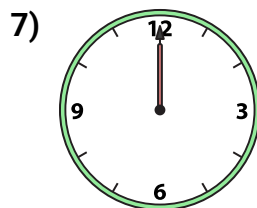
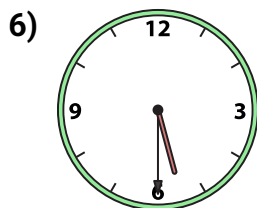
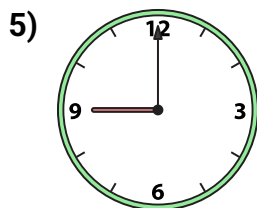
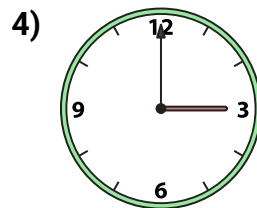
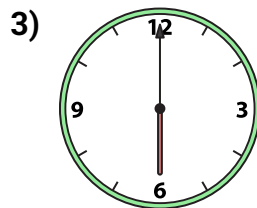
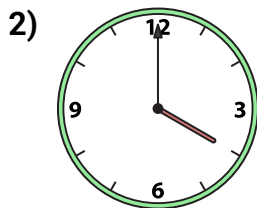
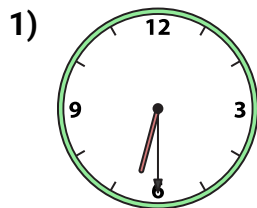


# Emparejando Relojes

Nombre: **Clave De Respuestas**

Emparejar el reloj analógico con el reloj digital correspondiente.

Respuestas



A. **4:00**

B. **5:30**

C. **3:00**

D. **12:00**

E. **6:00**

F. **6:30**

G. **2:00**

H. **11:30**

I. **5:00**

J. **10:00**

K. **1:00**

L. **7:00**

M. **1:30**

N. **8:30**

O. **9:00**

P. **12:30**

1. **F**

2. **A**

3. **E**

4. **C**

5. **O**

6. **B**

7. **D**

8. **K**

9. **I**

10. **P**

11. **N**

12. **G**

13. **J**

14. **H**

15. **L**

16. **M**