


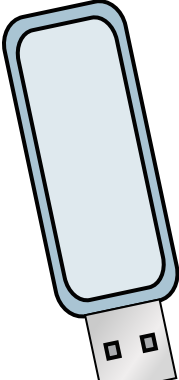


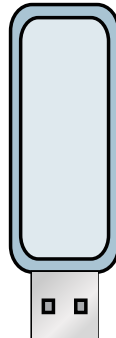


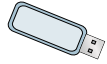
Mida cada ITEM punta a punta y luego coloque sus resultados en la gráfica de línea.

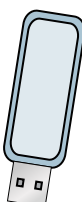
**Respuestas**


Ej) 


1) 


2) 

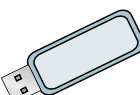
3) 

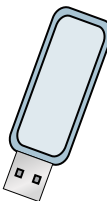
4) 


5) 

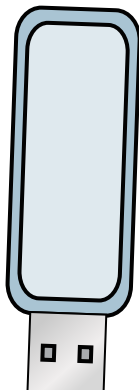
6) 

7) 

8) 

9) 

10) 

11) 

- Ej. 1 <sup>1</sup>/<sub>4</sub>
1. 2
2. 1 <sup>3</sup>/<sub>4</sub>
3. 1 <sup>1</sup>/<sub>2</sub>
4. 1
5. 1 <sup>1</sup>/<sub>2</sub>
6. 1 <sup>1</sup>/<sub>4</sub>
7. 3 <sup>3</sup>/<sub>4</sub>
8. 3 <sup>3</sup>/<sub>4</sub>
9. 1
10. 1 <sup>1</sup>/<sub>4</sub>
11. 2

