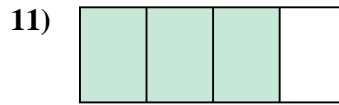
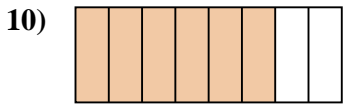
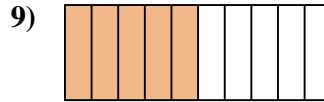
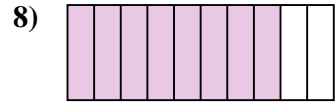
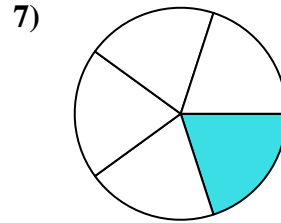
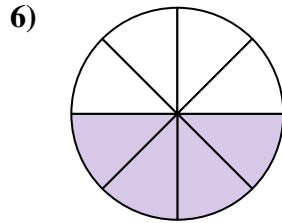
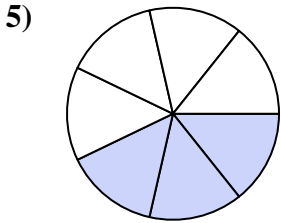

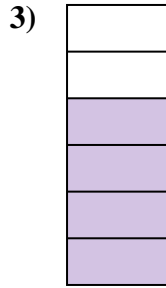
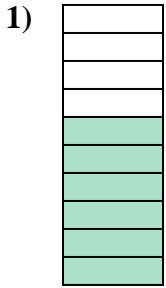




Determina si el área sombreada es 'más', 'menos' o 'igual' que la mitad.

Respuestas



1. _____

2. _____

3. _____

4. _____

5. _____

6. _____

7. _____

8. _____

9. _____

10. _____

11. _____

12. _____

13. _____

14. _____

15. _____

16. _____

17. _____

18. _____

19. _____


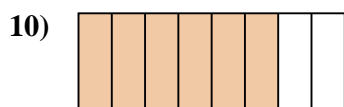
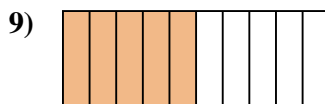
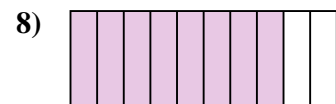
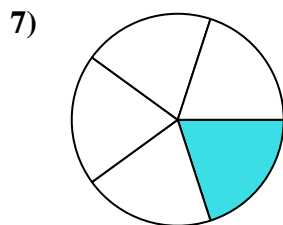
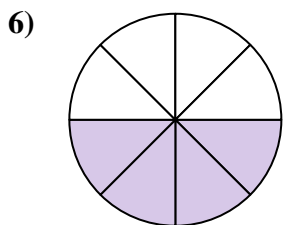
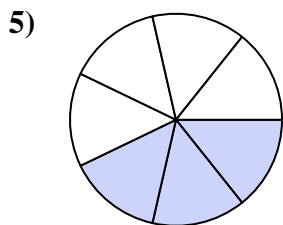

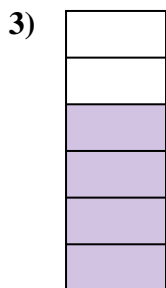

20. _____

1-10	95	90	85	80	75	70	65	60	55	50
11-20	45	40	35	30	25	20	15	10	5	0



Determina si el área sombreada es 'más', 'menos' o 'igual' que la mitad.

Respuestas



1. mayor

2. menor

3. mayor

4. menor

5. menor

6. igual

7. menor

8. mayor

9. igual

10. mayor

11. mayor

12. menor

13. mayor

14. mayor

15. menor

16. mayor

17. menor

18. menor

19. menor

20. mayor