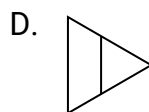
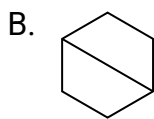
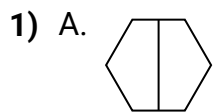


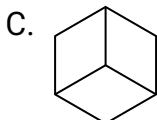
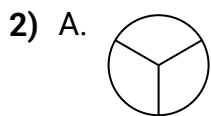


Determina cuál opción(es) muestran la forma dividida para que cada pieza tenga un área igual. Si ninguna, escribe 'ninguna'.

**Respuestas**

1. \_\_\_\_\_

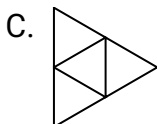
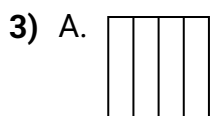
2. \_\_\_\_\_



3. \_\_\_\_\_

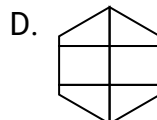
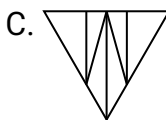
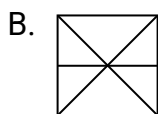
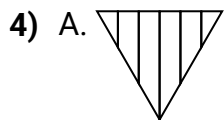
4. \_\_\_\_\_

5. \_\_\_\_\_

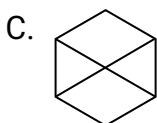
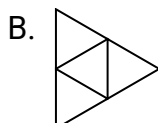
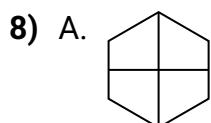
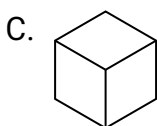
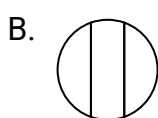
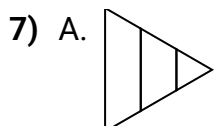
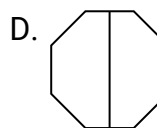
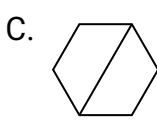
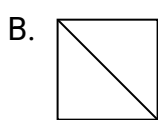
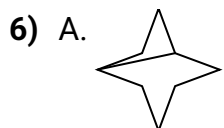
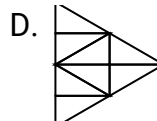
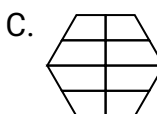
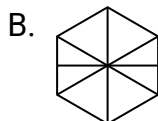
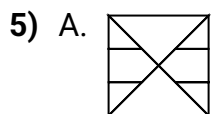


6. \_\_\_\_\_

7. \_\_\_\_\_

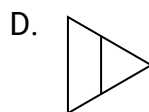
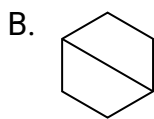
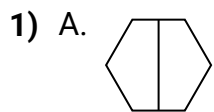
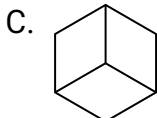
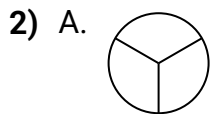
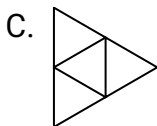
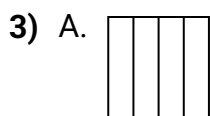
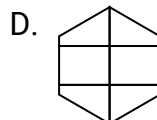
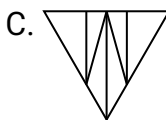
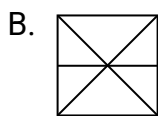
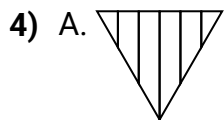


8. \_\_\_\_\_





Determina cuál opción(es) muestran la forma dividida para que cada pieza tenga un área igual. Si ninguna, escriba 'ninguna'.

**Respuestas**1. **A,B,C**2. **A,C**3. **A,C,D**4. **ninguna**5. **D**6. **B,C,D**7. **C**8. **A,B,D**