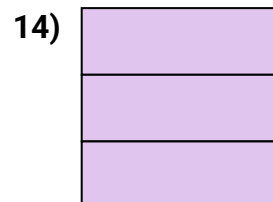
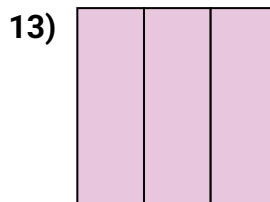
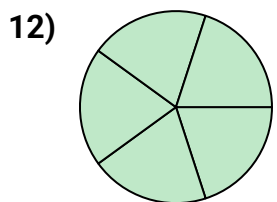
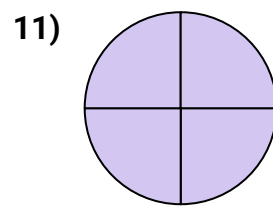

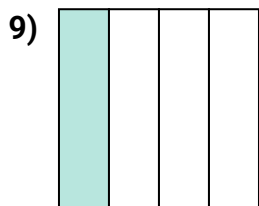

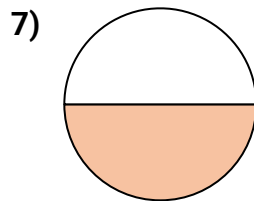
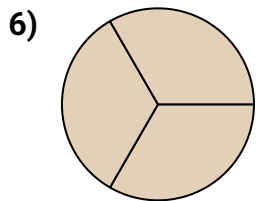

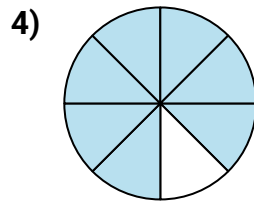
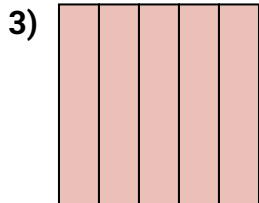
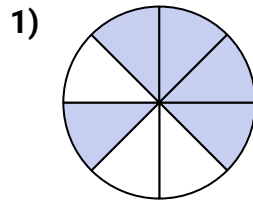
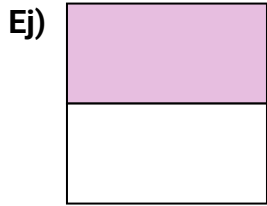




Escribe la cantidad sombreada como una fracción.

**Respuestas**Ej. $\frac{1}{2}$

1. _____

2. _____

3. _____

4. _____

5. _____

6. _____

7. _____

8. _____

9. _____

10. _____

11. _____

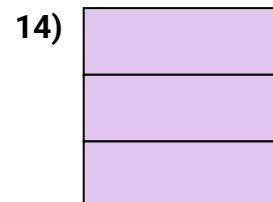
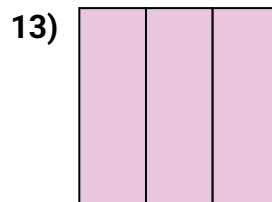
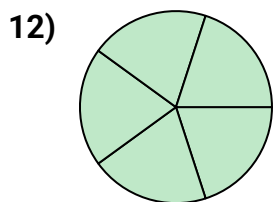
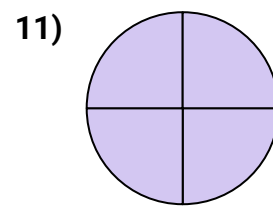

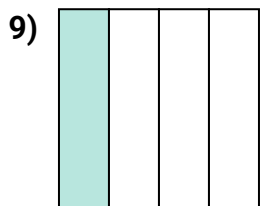

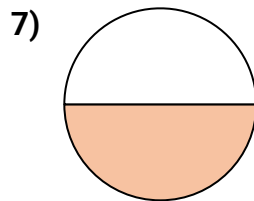
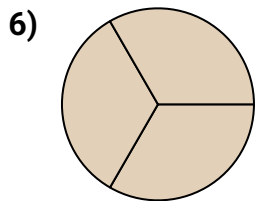
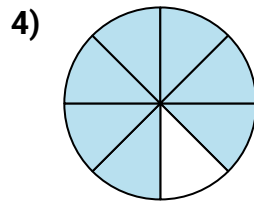
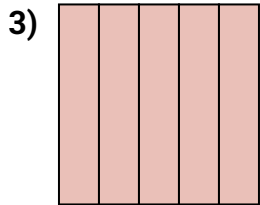
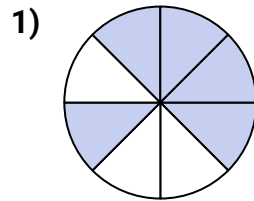
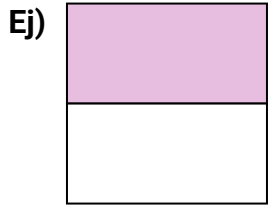
12. _____

13. _____

14. _____



Escribe la cantidad sombreada como una fracción.

**Respuestas**

- Ej. $\frac{1}{2}$
1. $\frac{5}{8}$
2. $\frac{3}{5}$
3. $\frac{5}{5}$
4. $\frac{7}{8}$
5. $\frac{2}{2}$
6. $\frac{3}{3}$
7. $\frac{1}{2}$
8. $\frac{7}{8}$
9. $\frac{1}{4}$
10. $\frac{1}{4}$
11. $\frac{4}{4}$
12. $\frac{5}{5}$
13. $\frac{3}{3}$
14. $\frac{3}{3}$