

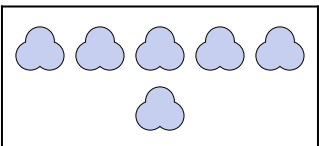
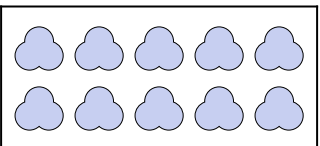


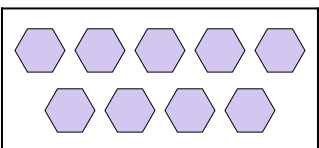
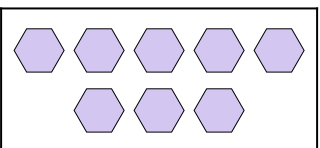


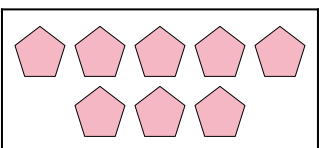
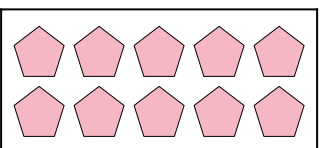
Expresa el problema visual como una ecuación con respuesta.

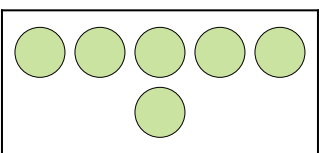
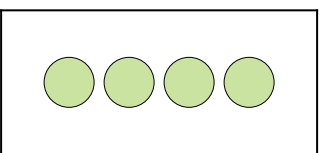
Respuestas

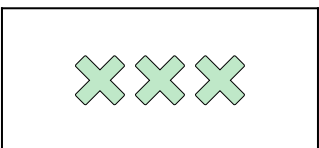
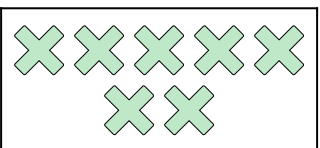
1)  +  =

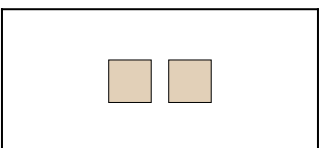
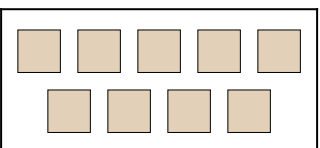
2)  +  =

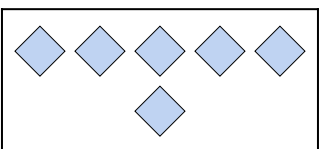
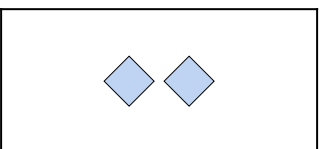
3)  +  =

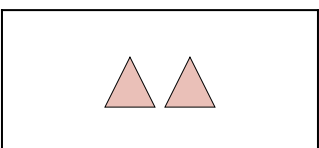
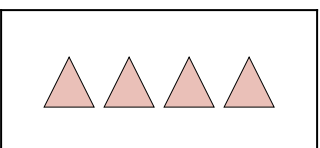
4)  +  =



5)  +  =

6)  +  =

7)  +  =

8)  +  =

9)  +  =

10)  +  =

1. _____

2. _____

3. _____

4. _____

5. _____

6. _____

7. _____

8. _____



9. _____

10. _____

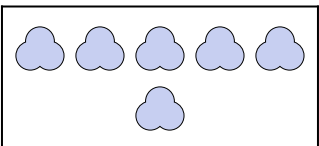
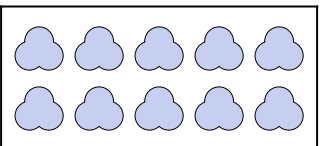


Expresa el problema visual como una ecuación con respuesta.

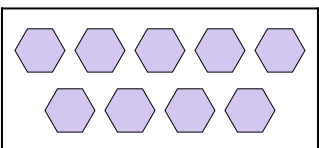
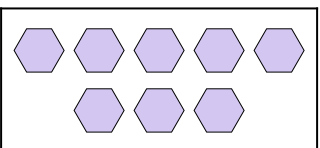
Respuestas

1)  +  =

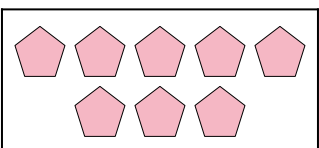
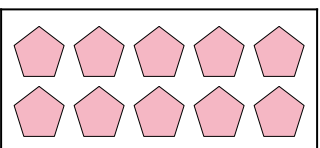
1. $10 + 5 = 15$

2)  +  =

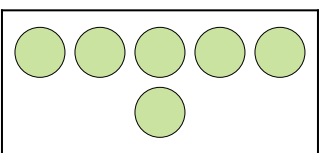
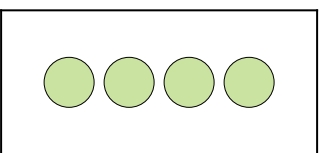
2. $6 + 10 = 16$

3)  +  =

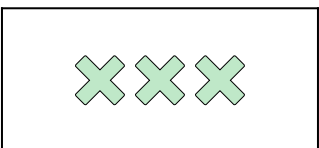
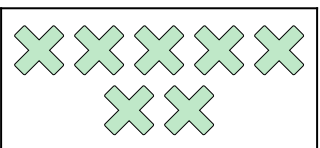
3. $9 + 8 = 17$

4)  +  =

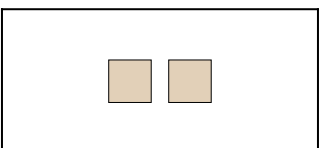
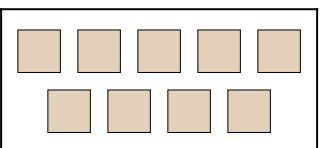
4. $8 + 10 = 18$

5)  +  =

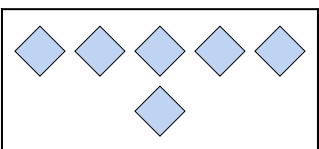
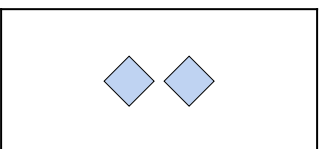
5. $6 + 4 = 10$

6)  +  =

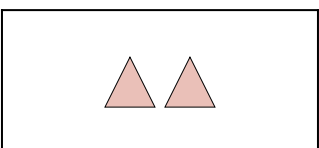
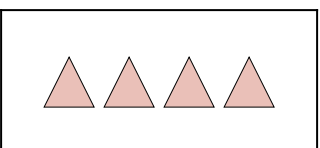
6. $3 + 7 = 10$

7)  +  =



7. $2 + 9 = 11$

8)  +  =

8. $6 + 2 = 8$

9)  +  =

9. $2 + 4 = 6$

10)  +  =

10. $6 + 4 = 10$