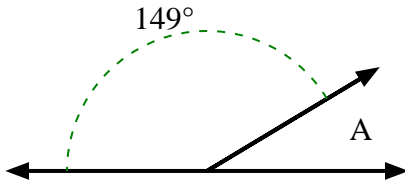




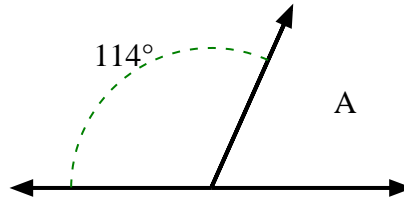
Encuentra el valor de 'A' en el conjunto de ángulos suplementarios.

Respuestas

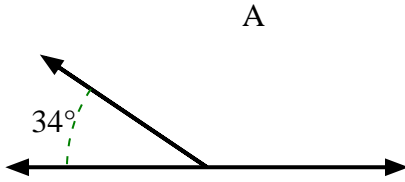
1)



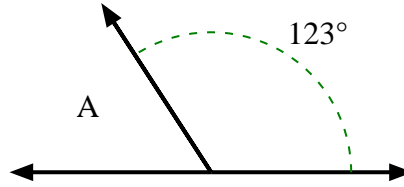
2)



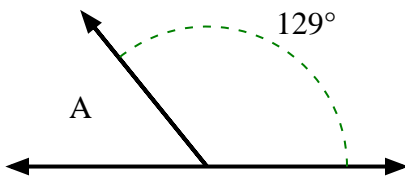
3)



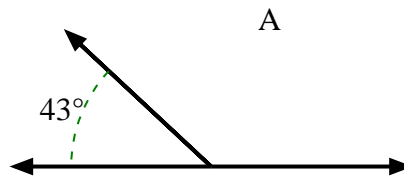
4)



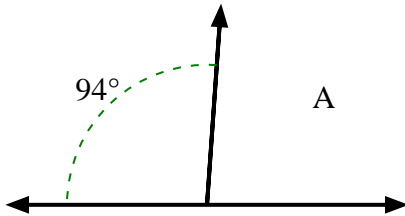
5)



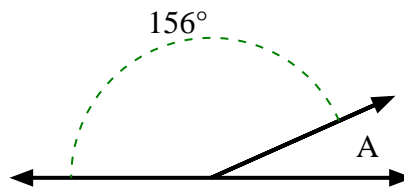
6)



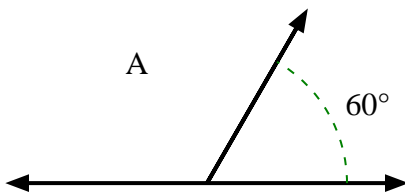
7)



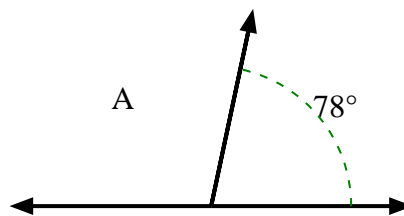
8)



9)



10)

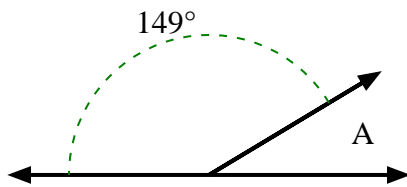


1. _____
2. _____
3. _____
4. _____
5. _____
6. _____
7. _____
8. _____
9. _____
10. _____

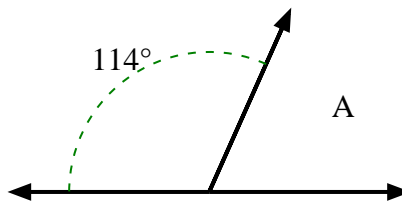


Encuentra el valor de 'A' en el conjunto de ángulos suplementarios.

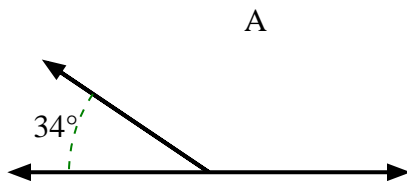
1)



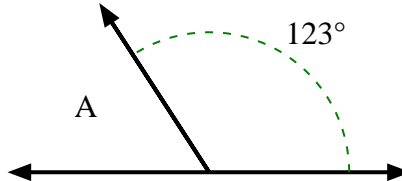
2)



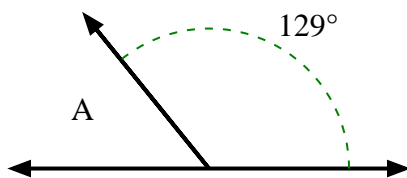
3)



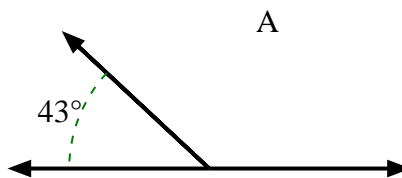
4)



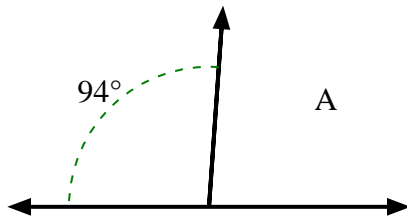
5)



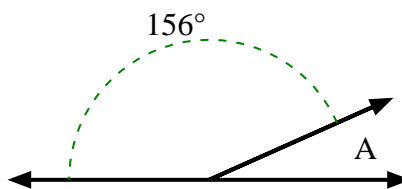
6)



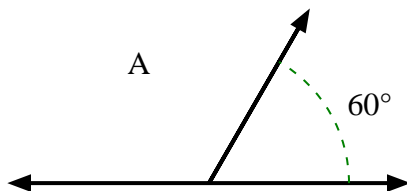
7)



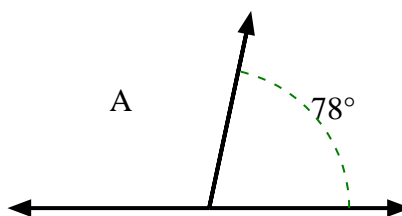
8)



9)



10)

**Respuestas**1. **31°**2. **66°**3. **146°**4. **57°**5. **51°**6. **137°**7. **86°**8. **24°**9. **120°**10. **102°**