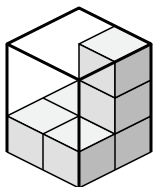




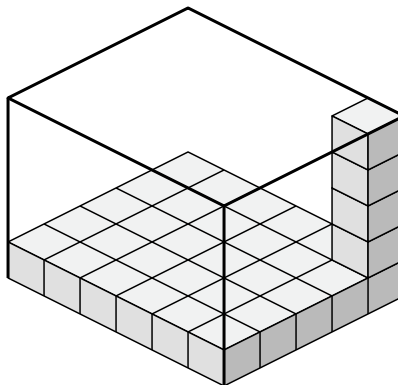
Cree una expresión para determinar el volumen de cada caja.

Respuestas

1)



2)



1. _____

2. _____

3. _____

4. _____

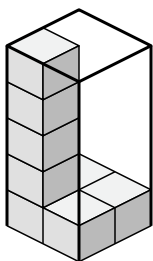
5. _____

6. _____

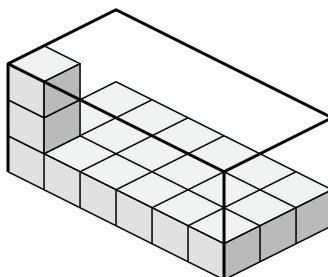
7. _____

8. _____

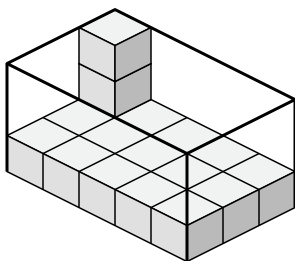
3)



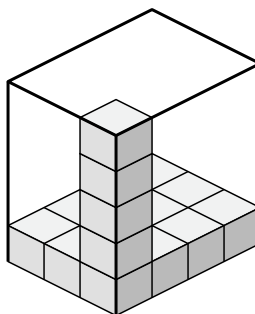
4)



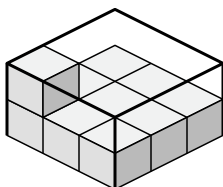
5)



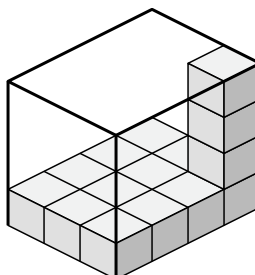
6)



7)



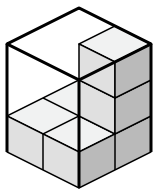
8)



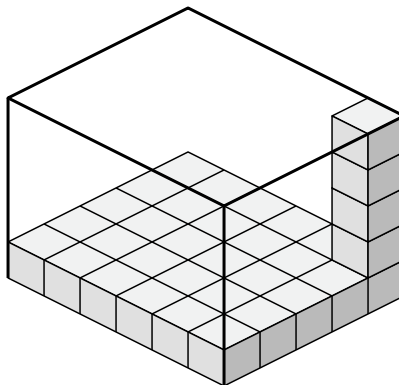


Cree una expresión para determinar el volumen de cada caja.

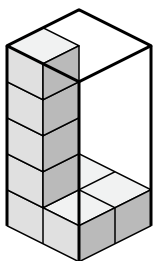
1)



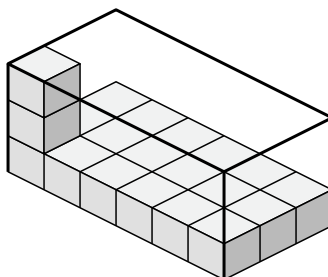
2)



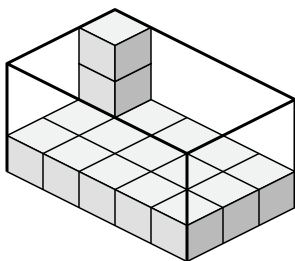
3)



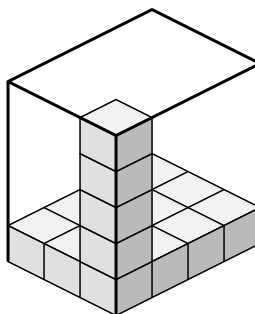
4)



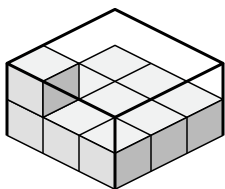
5)



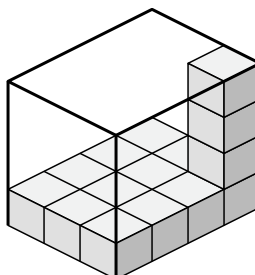
6)



7)



8)

**Respuestas**

1. $2 \times 2 \times 3$

2. $6 \times 5 \times 5$

3. $2 \times 2 \times 5$

4. $6 \times 3 \times 3$

5. $5 \times 3 \times 3$

6. $3 \times 4 \times 5$

7. $3 \times 3 \times 2$

8. $3 \times 4 \times 4$