



Resuelve cada problema.

1) $1 + 4 =$ _____

2) $3 + 0 =$ _____

3) $3 + 2 =$ _____

4) $2 - 2 =$ _____

5) $2 + 3 =$ _____

6) $3 + 1 =$ _____

7) $5 + 0 =$ _____

8) $3 - 1 =$ _____

9) $4 - 3 =$ _____

10) $2 + 1 =$ _____

11) $4 + 1 =$ _____

12) $5 - 2 =$ _____

13) $5 - 5 =$ _____

14) $5 - 3 =$ _____

15) $5 - 4 =$ _____

16) $1 - 1 =$ _____

Respuestas

1. _____

2. _____

3. _____

4. _____

5. _____

6. _____

7. _____

8. _____

9. _____

10. _____

11. _____

12. _____

13. _____

14. _____

15. _____

16. _____



Resuelve cada problema.

1) $1 + 4 =$ 5

2) $3 + 0 =$ 3

3) $3 + 2 =$ 5

4) $2 - 2 =$ 0

5) $2 + 3 =$ 5

6) $3 + 1 =$ 4

7) $5 + 0 =$ 5

8) $3 - 1 =$ 2

9) $4 - 3 =$ 1

10) $2 + 1 =$ 3

11) $4 + 1 =$ 5

12) $5 - 2 =$ 3

13) $5 - 5 =$ 0

14) $5 - 3 =$ 2

15) $5 - 4 =$ 1

16) $1 - 1 =$ 0

Respuestas

1. 5

2. 3

3. 5

4. 0

5. 5

6. 4

7. 5

8. 2

9. 1

10. 3

11. 5

12. 3

13. 0



14. 2



15. 1



16. 0







Resuelve cada problema.



1) $1 + 4 =$ _____
 

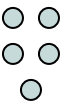

2) $3 + 0 =$ _____
 



3) $3 + 2 =$ _____
 



4) $2 - 2 =$ _____
 



5) $2 + 3 =$ _____
 



6) $3 + 1 =$ _____
 



7) $5 + 0 =$ _____
 

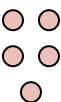
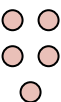
8) $3 - 1 =$ _____
 

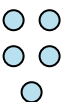

9) $4 - 3 =$ _____
 



10) $2 + 1 =$ _____
 



11) $4 + 1 =$ _____
 

12) $5 - 2 =$ _____
 

13) $5 - 5 =$ _____
 

14) $5 - 3 =$ _____
 

15) $5 - 4 =$ _____
 

16) $1 - 1 =$ _____
 

Respuestas

1. _____
2. _____
3. _____
4. _____
5. _____
6. _____
7. _____
8. _____
9. _____
10. _____
11. _____
12. _____
13. _____
14. _____
15. _____
16. _____